
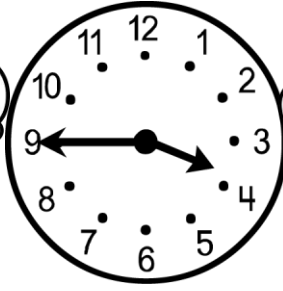



# Christmas Math

3rd & 4th  
Grade



Name \_\_\_\_\_ Date \_\_\_\_\_



\_\_\_\_ : \_\_\_\_

\_\_\_\_ : \_\_\_\_

\_\_\_\_ : \_\_\_\_

The elves began making toys at 3:30 on Monday afternoon. They worked until 6:45 and had made 254 train sets and doll houses! How long did they spend building toys?

\_\_\_\_\_

Mrs. Claus baked cookies on Saturday morning. She started the first batch at 9:00am. She baked for an hour and fifteen minutes. What time did she get done?

\_\_\_\_\_

About what time do you start your school day? \_\_\_\_\_

What time do you usually go to bed for the night? \_\_\_\_\_



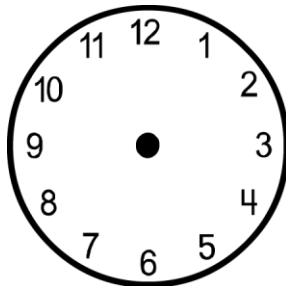
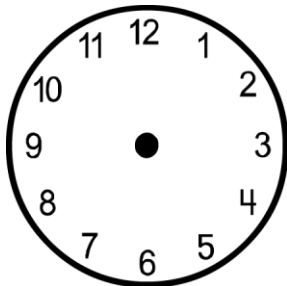
Draw the hands on the clock to show the time.

6:25

12:40

9:10

3:50



What is your favorite time of the day? Why is it your favorite?

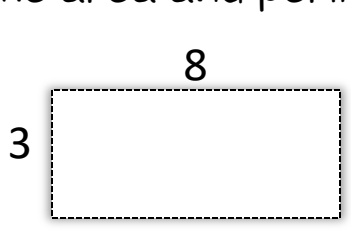
\_\_\_\_\_  
\_\_\_\_\_  
\_\_\_\_\_  
\_\_\_\_\_





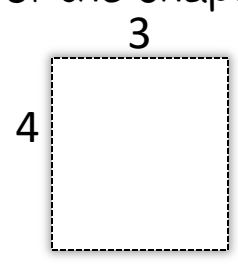
Name \_\_\_\_\_ Date \_\_\_\_\_

Find the area and perimeter of the shapes below.



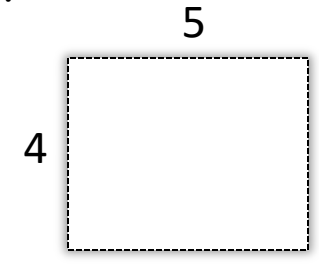
A= \_\_\_\_\_

P= \_\_\_\_\_



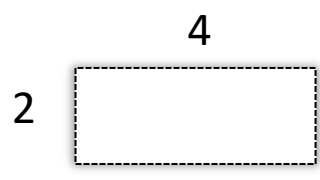
A= \_\_\_\_\_

P= \_\_\_\_\_



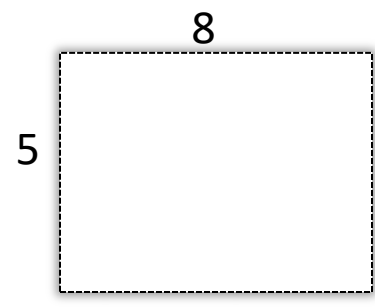
A= \_\_\_\_\_

P= \_\_\_\_\_



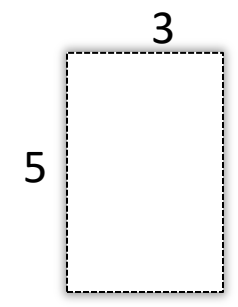
A= \_\_\_\_\_

P= \_\_\_\_\_



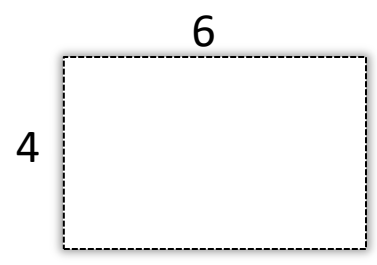
A= \_\_\_\_\_

P= \_\_\_\_\_



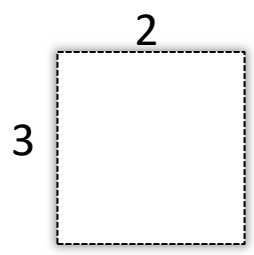
A= \_\_\_\_\_

P= \_\_\_\_\_



A= \_\_\_\_\_

P= \_\_\_\_\_




A= \_\_\_\_\_

P= \_\_\_\_\_

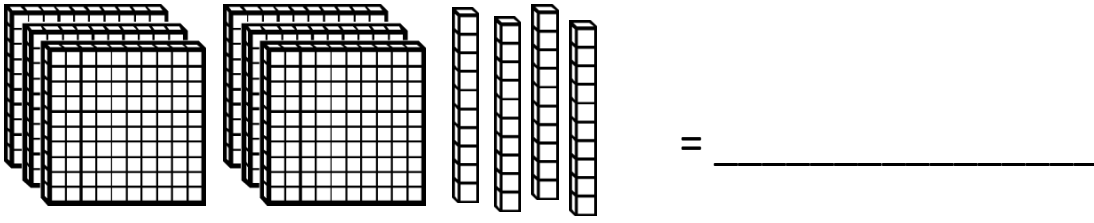
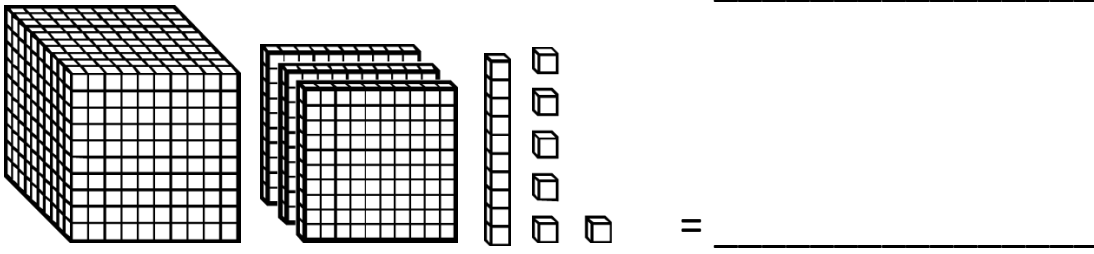
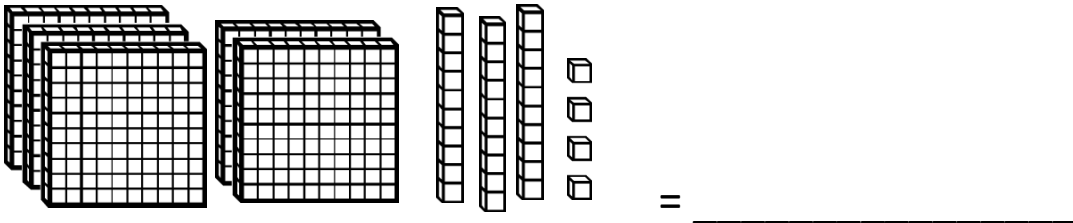


A= \_\_\_\_\_

P= \_\_\_\_\_



Name \_\_\_\_\_ Date \_\_\_\_\_





What is the largest number you can make with these digits?

5 7 2 4 1 3 = \_\_\_\_\_

1 4 6 2 9 1 = \_\_\_\_\_

3 8 5 2 6 3 = \_\_\_\_\_



Find the sum or difference.

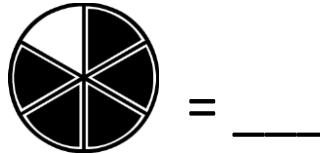
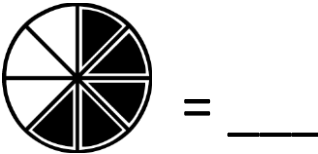
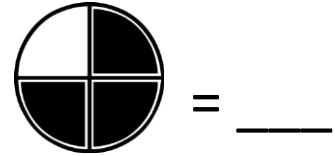
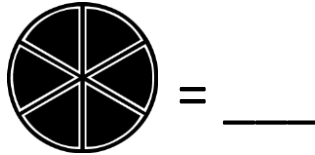
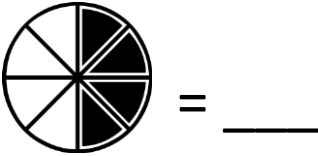
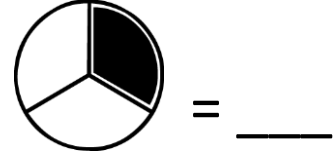
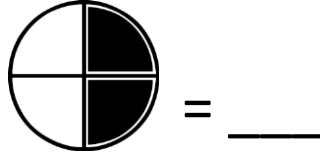
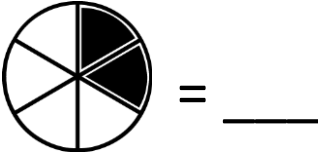
$147 + 201 =$  \_\_\_\_\_  $330 + 199 =$  \_\_\_\_\_

$457 - 158 =$  \_\_\_\_\_  $621 - 427 =$  \_\_\_\_\_



Name \_\_\_\_\_ Date \_\_\_\_\_

Name the fraction.



Add or subtract.

$$\begin{array}{r} 47 \\ + 89 \\ \hline \end{array}$$

$$\begin{array}{r} 36 \\ + 78 \\ \hline \end{array}$$

$$\begin{array}{r} 99 \\ + 14 \\ \hline \end{array}$$

$$\begin{array}{r} 63 \\ + 29 \\ \hline \end{array}$$

$$\begin{array}{r} 72 \\ - 65 \\ \hline \end{array}$$

$$\begin{array}{r} 96 \\ - 35 \\ \hline \end{array}$$

$$\begin{array}{r} 88 \\ - 39 \\ \hline \end{array}$$

$$\begin{array}{r} 44 \\ - 26 \\ \hline \end{array}$$



Name \_\_\_\_\_ Date \_\_\_\_\_

# COUNT THE MONEY


WRITE  
THE  
AMOUNT




\$ \_\_\_\_.



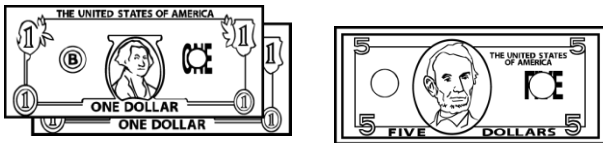
\$ \_\_\_\_.



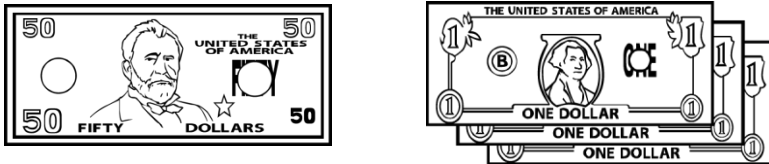
\$ \_\_\_\_.




\$ \_\_\_\_.




\$ \_\_\_\_.



\$ \_\_\_\_.



\$ \_\_\_\_.



Name \_\_\_\_\_ Date \_\_\_\_\_

What is the value of the underlined digit?

1. 875 \_\_\_\_\_

6. 1,845 \_\_\_\_\_

2. 3,201 \_\_\_\_\_

7. 5,611 \_\_\_\_\_

3. 76,503 \_\_\_\_\_

8. 98,324 \_\_\_\_\_

4. 63 \_\_\_\_\_

9. 2,505 \_\_\_\_\_

5. 9,783 \_\_\_\_\_

10. 9,783 \_\_\_\_\_

Write the number in standard form.

1.  $700 + 20 + 6$  \_\_\_\_\_

6.  $9,000 + 60 + 3$  \_\_\_\_\_

2.  $3,000 + 500 + 70 + 1$  \_\_\_\_\_

7.  $2,000 + 900 + 7$  \_\_\_\_\_

3.  $500 + 40$  \_\_\_\_\_

8.  $6,000 + 100 + 20$  \_\_\_\_\_

4.  $8,000 + 60 + 3$  \_\_\_\_\_

9.  $5,000 + 80 + 6$  \_\_\_\_\_

5.  $4,000 + 100 + 50$  \_\_\_\_\_

10.  $7,000 + 400 + 70 + 1$  \_\_\_\_\_

Write the number.

six thousand, forty-eight

\_\_\_\_\_

five hundred twenty-three

\_\_\_\_\_

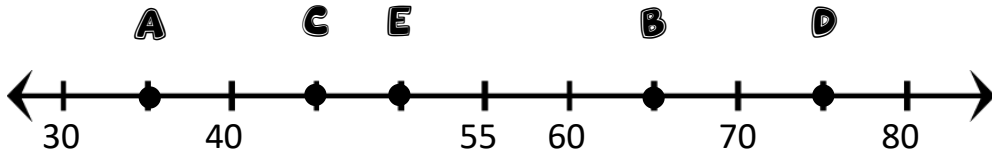
eight thousand, two hundred one

\_\_\_\_\_




NAME \_\_\_\_\_ DATE \_\_\_\_\_

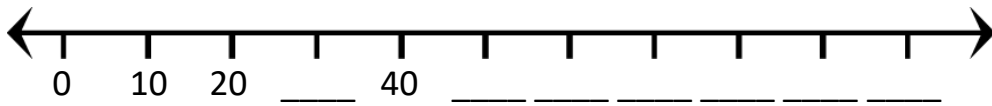
Write the correct number represented by each letter.



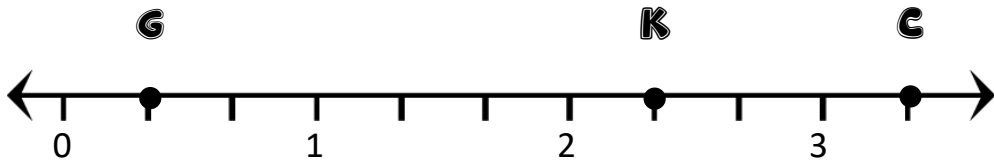

A=\_\_\_\_ B=\_\_\_\_ C=\_\_\_\_ D=\_\_\_\_ E=\_\_\_\_



Fill in the rest of this number line.

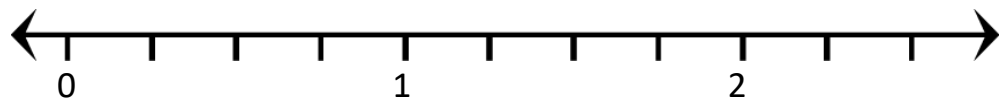


Write the fraction or mixed number represented by each letter.



C=\_\_\_\_ G=\_\_\_\_ K=\_\_\_\_

Find and label the following points on the number line.



$P = \frac{1}{2}$        $T = 1\frac{3}{4}$        $K = 2\frac{1}{4}$

Find the product.

$2 \times 10 =$  \_\_\_\_\_       $4 \times 6 =$  \_\_\_\_\_       $3 \times 8 =$  \_\_\_\_\_       $5 \times 5 =$  \_\_\_\_\_

$6 \times 3 =$  \_\_\_\_\_       $7 \times 3 =$  \_\_\_\_\_       $4 \times 10 =$  \_\_\_\_\_       $5 \times 9 =$  \_\_\_\_\_

$8 \times 2 =$  \_\_\_\_\_       $6 \times 0 =$  \_\_\_\_\_       $9 \times 4 =$  \_\_\_\_\_       $8 \times 7 =$  \_\_\_\_\_



NAME \_\_\_\_\_ DATE \_\_\_\_\_

Round to the nearest 10.

77 \_\_\_\_\_ 112 \_\_\_\_\_ 16 \_\_\_\_\_ 45 \_\_\_\_\_

98 \_\_\_\_\_ 54 \_\_\_\_\_ 459 \_\_\_\_\_ 236 \_\_\_\_\_

Round to the nearest 100.

405 \_\_\_\_\_ 339 \_\_\_\_\_ 196 \_\_\_\_\_ 945 \_\_\_\_\_

841 \_\_\_\_\_ 754 \_\_\_\_\_ 489 \_\_\_\_\_ 263 \_\_\_\_\_

Round to the nearest 1,000.

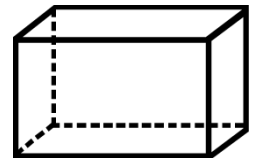
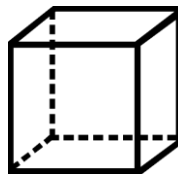
2,503 \_\_\_\_\_ 5,499 \_\_\_\_\_ 8,631 \_\_\_\_\_

9,127 \_\_\_\_\_ 36,250 \_\_\_\_\_ 14,810 \_\_\_\_\_


4,205 \_\_\_\_\_ 5,782 \_\_\_\_\_ 3,196 \_\_\_\_\_

Name the shape.

- Cone
- Cylinder
- Cube
- Sphere
- Rectangular Prism



\_\_\_\_\_



Name \_\_\_\_\_ Date \_\_\_\_\_

$$\begin{array}{r} 265 \\ + 122 \\ \hline \end{array}$$

$$\begin{array}{r} 145 \\ + 231 \\ \hline \end{array}$$

$$\begin{array}{r} 398 \\ + 109 \\ \hline \end{array}$$

$$\begin{array}{r} 478 \\ + 299 \\ \hline \end{array}$$

$$\begin{array}{r} 555 \\ + 746 \\ \hline \end{array}$$

$$\begin{array}{r} 329 \\ + 130 \\ \hline \end{array}$$

$$\begin{array}{r} 298 \\ + 354 \\ \hline \end{array}$$

$$\begin{array}{r} 357 \\ + 159 \\ \hline \end{array}$$

$$\begin{array}{r} 821 \\ + 124 \\ \hline \end{array}$$

$$\begin{array}{r} 204 \\ + 368 \\ \hline \end{array}$$


$$\begin{array}{r} 473 \\ + 118 \\ \hline \end{array}$$

$$\begin{array}{r} 156 \\ + 307 \\ \hline \end{array}$$

$$\begin{array}{r} 447 \\ + 631 \\ \hline \end{array}$$

$$\begin{array}{r} 517 \\ + 208 \\ \hline \end{array}$$

$$\begin{array}{r} 349 \\ + 522 \\ \hline \end{array}$$



NAME \_\_\_\_\_

DATE \_\_\_\_\_

$$\begin{array}{r} 4 \\ \times 4 \\ \hline \end{array}$$

$$\begin{array}{r} 6 \\ \times 2 \\ \hline \end{array}$$

$$\begin{array}{r} 3 \\ \times 3 \\ \hline \end{array}$$

$$\begin{array}{r} 5 \\ \times 6 \\ \hline \end{array}$$

$$\begin{array}{r} 2 \\ \times 9 \\ \hline \end{array}$$

$$\begin{array}{r} 1 \\ \times 4 \\ \hline \end{array}$$

$$\begin{array}{r} 5 \\ \times 7 \\ \hline \end{array}$$

$$\begin{array}{r} 8 \\ \times 6 \\ \hline \end{array}$$

$$\begin{array}{r} 5 \\ \times 5 \\ \hline \end{array}$$

$$\begin{array}{r} 4 \\ \times 7 \\ \hline \end{array}$$

$$\begin{array}{r} 7 \\ \times 6 \\ \hline \end{array}$$

$$\begin{array}{r} 9 \\ \times 0 \\ \hline \end{array}$$

$$\begin{array}{r} 4 \\ \times 2 \\ \hline \end{array}$$

$$\begin{array}{r} 3 \\ \times 7 \\ \hline \end{array}$$

$$\begin{array}{r} 2 \\ \times 8 \\ \hline \end{array}$$

$$\begin{array}{r} 6 \\ \times 3 \\ \hline \end{array}$$

$$\begin{array}{r} 8 \\ \times 3 \\ \hline \end{array}$$

$$\begin{array}{r} 2 \\ \times 6 \\ \hline \end{array}$$

$$\begin{array}{r} 8 \\ \times 5 \\ \hline \end{array}$$

$$\begin{array}{r} 7 \\ \times 1 \\ \hline \end{array}$$


$$\begin{array}{r} 2 \\ \times 2 \\ \hline \end{array}$$

$$\begin{array}{r} 4 \\ \times 9 \\ \hline \end{array}$$

$$\begin{array}{r} 6 \\ \times 4 \\ \hline \end{array}$$

$$\begin{array}{r} 8 \\ \times 0 \\ \hline \end{array}$$

$$\begin{array}{r} 5 \\ \times 3 \\ \hline \end{array}$$





Name \_\_\_\_\_

Date \_\_\_\_\_

$$\begin{array}{r} 478 \\ - 122 \\ \hline \end{array}$$

$$\begin{array}{r} 320 \\ - 231 \\ \hline \end{array}$$

$$\begin{array}{r} 398 \\ - 255 \\ \hline \end{array}$$

$$\begin{array}{r} 785 \\ - 299 \\ \hline \end{array}$$

$$\begin{array}{r} 411 \\ - 346 \\ \hline \end{array}$$

$$\begin{array}{r} 236 \\ - 130 \\ \hline \end{array}$$

$$\begin{array}{r} 278 \\ - 210 \\ \hline \end{array}$$

$$\begin{array}{r} 219 \\ - 159 \\ \hline \end{array}$$

$$\begin{array}{r} 821 \\ - 477 \\ \hline \end{array}$$

$$\begin{array}{r} 871 \\ - 368 \\ \hline \end{array}$$



$$\begin{array}{r} 473 \\ - 288 \\ \hline \end{array}$$

$$\begin{array}{r} 416 \\ - 307 \\ \hline \end{array}$$


$$\begin{array}{r} 674 \\ - 208 \\ \hline \end{array}$$

$$\begin{array}{r} 698 \\ - 522 \\ \hline \end{array}$$

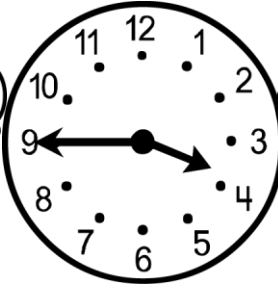
$$\begin{array}{r} 541 \\ - 155 \\ \hline \end{array}$$




Name \_\_\_\_\_ Date \_\_\_\_\_



7:15



3:45



12:30

The elves began making toys at 3:30 on Monday afternoon. They worked until 6:45 and had made 254 train sets and doll houses! How long did they spend building toys? **3 hours and 15 minutes**

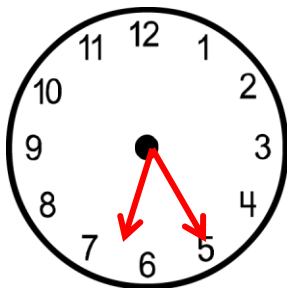
Mrs. Claus baked cookies on Saturday morning. She started the first batch at 9:00am. She baked for an hour and fifteen minutes. What time did she get done? **10:15**

About what time do you start your school day? \_\_\_\_\_

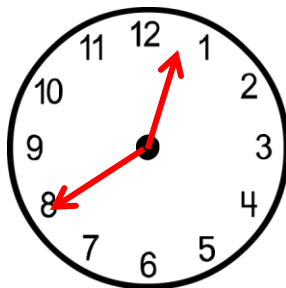
What time do you usually go to bed for the night? \_\_\_\_\_

Draw the hands on the clock to show the time.

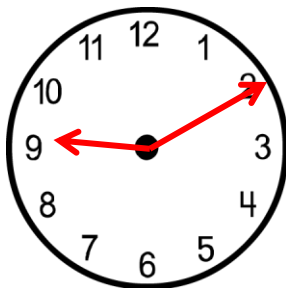
6:25



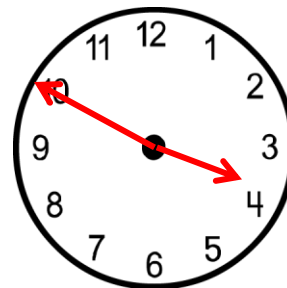
12:40



9:10



3:50



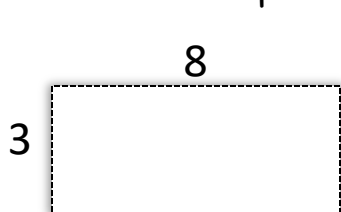
What is your favorite time of the day? Why is it your favorite?

\_\_\_\_\_  
\_\_\_\_\_  
\_\_\_\_\_  
\_\_\_\_\_



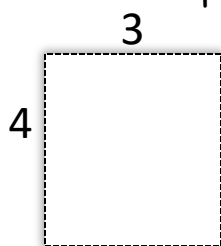
Name \_\_\_\_\_ Date \_\_\_\_\_

Find the area and perimeter of the shapes below.



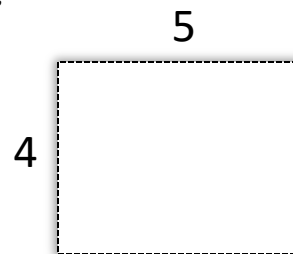
$A = 24$

$P = 22$



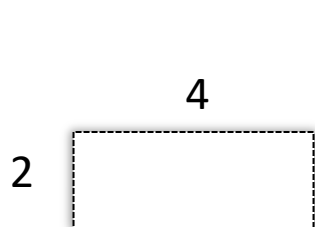
$A = 12$

$P = 14$



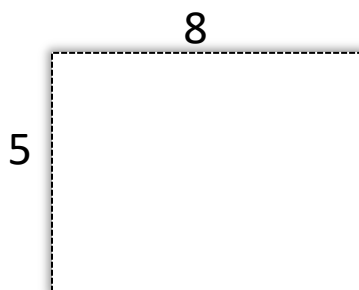
$A = 20$

$P = 18$



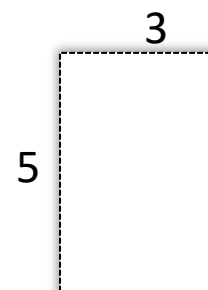
$A = 8$

$P = 12$



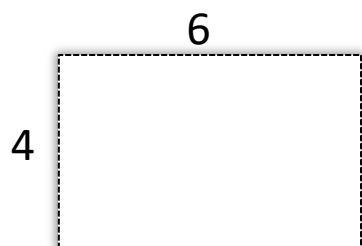
$A = 40$

$P = 26$



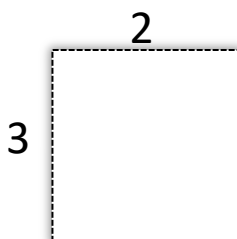
$A = 15$

$P = 16$



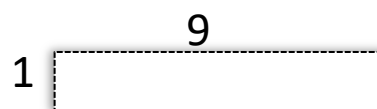
$A = 24$

$P = 20$



$A = 6$

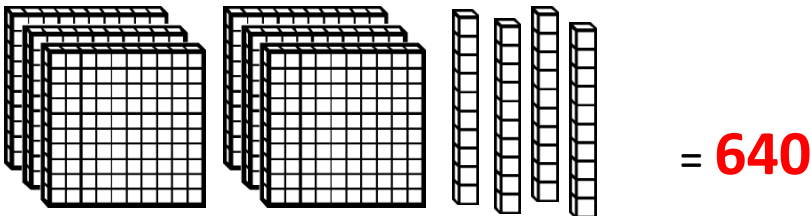
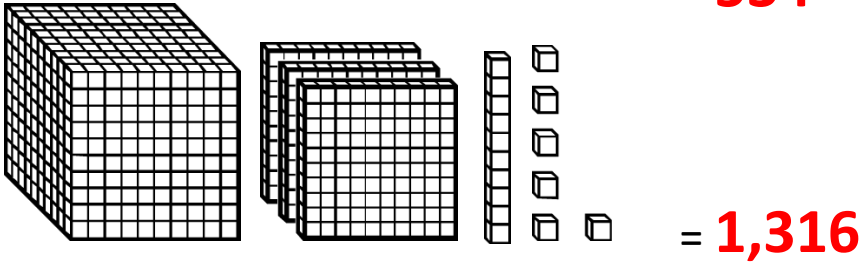
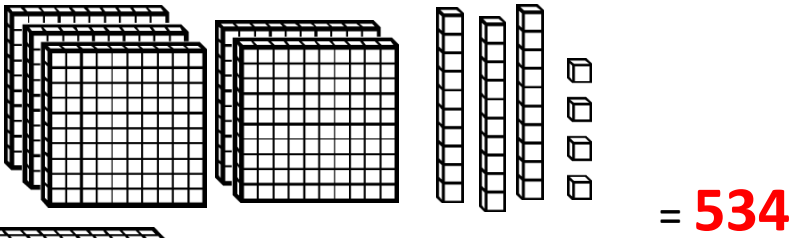
$P = 10$



$A = 9$

$P = 20$

Name \_\_\_\_\_ Date \_\_\_\_\_




What is the largest number you can make with these digits?

5 7 2 4 1 3 = **754,321**

1 4 6 2 9 1 = **964,211**

3 8 5 2 6 3 = **865,332**



Find the sum or difference.

$147 + 201 = 348$

$330 + 199 = 529$

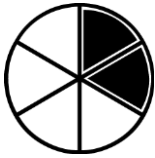
$457 - 158 = 299$

$621 - 427 = 194$

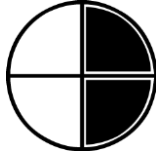


Name \_\_\_\_\_ Date \_\_\_\_\_

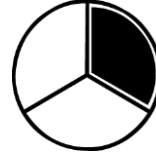
Name the fraction.



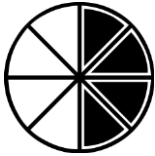
$$= \frac{2}{6}$$



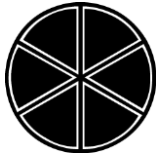
$$= \frac{2}{4} \text{ or } \frac{1}{2}$$



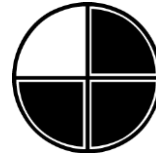
$$= \frac{1}{3}$$



$$= \frac{4}{8} \text{ or } \frac{1}{2}$$



$$= 1 \text{ or } \frac{6}{6}$$



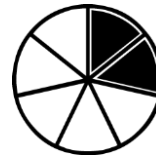
$$= \frac{3}{4}$$



$$= \frac{5}{8}$$



$$= \frac{5}{6}$$



$$= \frac{2}{7}$$



Add or subtract.

$$\begin{array}{r} 47 \\ + 89 \\ \hline 136 \end{array}$$

$$\begin{array}{r} 36 \\ + 78 \\ \hline 114 \end{array}$$

$$\begin{array}{r} 99 \\ + 14 \\ \hline 113 \end{array}$$

$$\begin{array}{r} 63 \\ + 29 \\ \hline 92 \end{array}$$

$$\begin{array}{r} 72 \\ - 65 \\ \hline 7 \end{array}$$

$$\begin{array}{r} 96 \\ - 35 \\ \hline 61 \end{array}$$

$$\begin{array}{r} 88 \\ - 39 \\ \hline 49 \end{array}$$

$$\begin{array}{r} 44 \\ - 26 \\ \hline 18 \end{array}$$





Name \_\_\_\_\_ Date \_\_\_\_\_

# COUNT THE MONEY

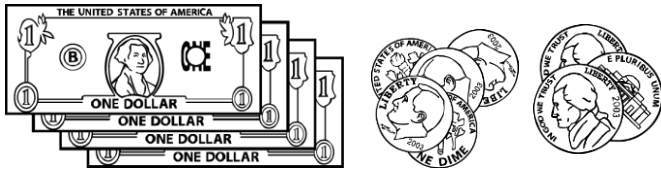
WRITE  
THE  
AMOUNT




1.60



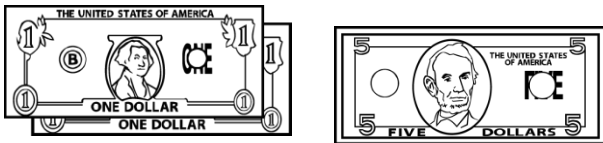
0.63



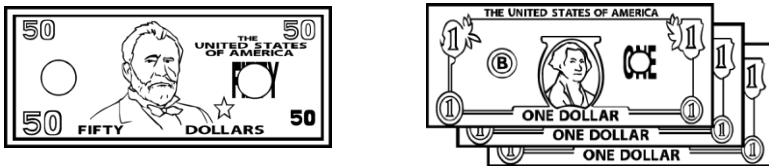
4.65




10.44




7.00



53.00



20.77



Name \_\_\_\_\_ Date \_\_\_\_\_

What is the value of the underlined digit?

1. 875 **70**

6. 1,845 **40**

2. 3,201 **200**

7. 5,611 **600**

3. 76,503 **6,000**

8. 98,324 **8,000**

4. 63 **3**

9. 2,505 **5**

5. 9,783 **9,000**

10. 9,783 **9,000**

Write the number in standard form.

1.  $700+20+6$  **726**

6.  $9,000+60+3$  **9,063**

2.  $3,000+500+70+1$  **3,571**

7.  $2,000+900+7$  **2,907**

3.  $500+40$  **540**

8.  $6,000+100+20$  **6,120**

4.  $8,000+60+3$  **8,063**

9.  $5,000+80+6$  **5,086**

5.  $4,000+100+50$  **4,150**

10.  $7,000+400+70+1$  **7,471**

Write the number.

six thousand, forty-eight

**6,048**

five hundred twenty-three

**523**

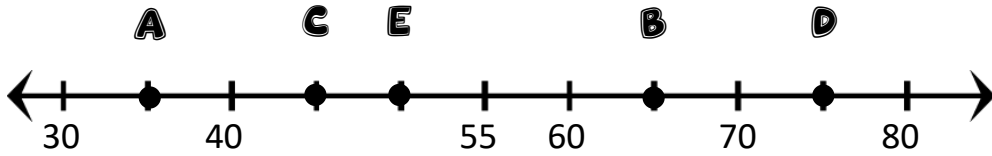
eight thousand, two hundred one

**8,201**




NAME \_\_\_\_\_ DATE \_\_\_\_\_

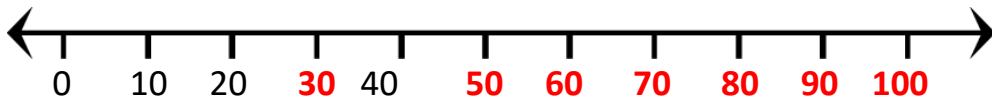
Write the correct number represented by each letter.



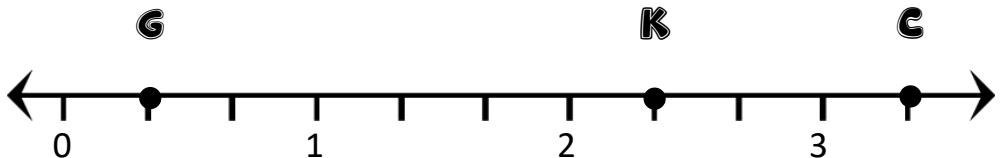

A = 35    B = 65    C = 45    D = 75    E = 50



Fill in the rest of this number line.

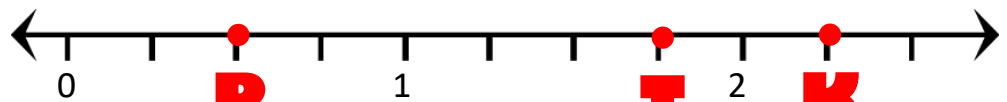


Write the fraction or mixed number represented by each letter.



C =  $3\frac{1}{3}$     G =  $\frac{1}{3}$     K =  $2\frac{1}{3}$

Find and label the following points on the number line.



P =  $\frac{1}{2}$     T =  $1\frac{3}{4}$     K =  $2\frac{1}{4}$

Find the product.

$2 \times 10 = 20$

$4 \times 6 = 24$

$3 \times 8 = 24$

$5 \times 5 = 25$

$6 \times 3 = 18$

$7 \times 3 = 21$

$4 \times 10 = 40$

$5 \times 9 = 45$

$8 \times 2 = 16$

$6 \times 0 = 0$

$9 \times 4 = 36$

$8 \times 7 = 58$

NAME \_\_\_\_\_ DATE \_\_\_\_\_

Round to the nearest 10.

77 **80**

112 **110**

16 **20**

45 **50**

98 **100**

54 **50**

459 **460**

236 **240**

Round to the nearest 100.

405 **400**

339 **300**

196 **200**

945 **900**

841 **800**

754 **800**

489 **500**

263 **300**

Round to the nearest 1,000.

2,503 **3,000**

5,499 **5,000**

8,631 **9,000**

9,127 **9,000**

36,250 **36,000**

14,810 **15,000**

4,205 **4,000**

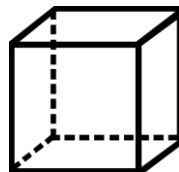
5,782 **6,000**

3,196 **3,000**

Name the shape.

- Cone
- Cylinder
- Cube
- Sphere

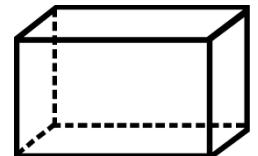
Rectangular Prism




**CUBE**



**CONE**



**REC. PRISM**



Name \_\_\_\_\_ Date \_\_\_\_\_

$$\begin{array}{r} 265 \\ + 122 \\ \hline 387 \end{array}$$

$$\begin{array}{r} 145 \\ + 231 \\ \hline 376 \end{array}$$

$$\begin{array}{r} 398 \\ + 109 \\ \hline 507 \end{array}$$

$$\begin{array}{r} 478 \\ + 299 \\ \hline 777 \end{array}$$

$$\begin{array}{r} 555 \\ + 746 \\ \hline 1301 \end{array}$$

$$\begin{array}{r} 329 \\ + 130 \\ \hline 459 \end{array}$$

$$\begin{array}{r} 298 \\ + 354 \\ \hline 652 \end{array}$$

$$\begin{array}{r} 357 \\ + 159 \\ \hline 516 \end{array}$$

$$\begin{array}{r} 821 \\ + 124 \\ \hline 945 \end{array}$$

$$\begin{array}{r} 204 \\ + 368 \\ \hline 572 \end{array}$$


$$\begin{array}{r} 473 \\ + 118 \\ \hline 591 \end{array}$$

$$\begin{array}{r} 156 \\ + 307 \\ \hline 463 \end{array}$$

$$\begin{array}{r} 447 \\ + 631 \\ \hline 1078 \end{array}$$

$$\begin{array}{r} 517 \\ + 208 \\ \hline 725 \end{array}$$

$$\begin{array}{r} 349 \\ + 522 \\ \hline 871 \end{array}$$



NAME \_\_\_\_\_

DATE \_\_\_\_\_

$$\begin{array}{r} 4 \\ \times 4 \\ \hline \end{array}$$

$$\begin{array}{r} 6 \\ \times 2 \\ \hline \end{array}$$

$$\begin{array}{r} 3 \\ \times 3 \\ \hline \end{array}$$

$$\begin{array}{r} 5 \\ \times 6 \\ \hline \end{array}$$

$$\begin{array}{r} 2 \\ \times 9 \\ \hline \end{array}$$

$$\begin{array}{r} 1 \\ \times 4 \\ \hline \end{array}$$

$$\begin{array}{r} 5 \\ \times 7 \\ \hline \end{array}$$

$$\begin{array}{r} 8 \\ \times 6 \\ \hline \end{array}$$

$$\begin{array}{r} 5 \\ \times 5 \\ \hline \end{array}$$

$$\begin{array}{r} 4 \\ \times 7 \\ \hline \end{array}$$

4

35

48

25

2  
8

$$\begin{array}{r} 7 \\ \times 6 \\ \hline \end{array}$$

$$\begin{array}{r} 9 \\ \times 0 \\ \hline \end{array}$$

$$\begin{array}{r} 4 \\ \times 2 \\ \hline \end{array}$$

$$\begin{array}{r} 3 \\ \times 7 \\ \hline \end{array}$$

$$\begin{array}{r} 2 \\ \times 8 \\ \hline \end{array}$$

42

0

8

21

16

$$\begin{array}{r} 6 \\ \times 3 \\ \hline \end{array}$$

$$\begin{array}{r} 8 \\ \times 3 \\ \hline \end{array}$$

$$\begin{array}{r} 2 \\ \times 6 \\ \hline \end{array}$$

$$\begin{array}{r} 8 \\ \times 5 \\ \hline \end{array}$$

$$\begin{array}{r} 7 \\ \times 1 \\ \hline \end{array}$$

18

24

12

40

7

$$\begin{array}{r} 2 \\ \times 2 \\ \hline \end{array}$$

$$\begin{array}{r} 4 \\ \times 9 \\ \hline \end{array}$$

$$\begin{array}{r} 6 \\ \times 4 \\ \hline \end{array}$$

$$\begin{array}{r} 8 \\ \times 0 \\ \hline \end{array}$$

$$\begin{array}{r} 5 \\ \times 3 \\ \hline \end{array}$$


4

36

24

0

15





Name \_\_\_\_\_

Date \_\_\_\_\_

$$\begin{array}{r} 478 \\ - 122 \\ \hline 356 \end{array}$$

$$\begin{array}{r} 320 \\ - 231 \\ \hline 89 \end{array}$$

$$\begin{array}{r} 398 \\ - 255 \\ \hline 143 \end{array}$$

$$\begin{array}{r} 785 \\ - 299 \\ \hline 486 \end{array}$$

$$\begin{array}{r} 411 \\ - 346 \\ \hline 65 \end{array}$$

$$\begin{array}{r} 236 \\ - 130 \\ \hline 106 \end{array}$$

$$\begin{array}{r} 278 \\ - 210 \\ \hline 68 \end{array}$$

$$\begin{array}{r} 219 \\ - 159 \\ \hline 60 \end{array}$$

$$\begin{array}{r} 821 \\ - 477 \\ \hline 344 \end{array}$$

$$\begin{array}{r} 871 \\ - 368 \\ \hline 503 \end{array}$$



$$\begin{array}{r} 473 \\ - 288 \\ \hline 185 \end{array}$$

$$\begin{array}{r} 416 \\ - 307 \\ \hline 109 \end{array}$$

$$\begin{array}{r} 674 \\ - 208 \\ \hline 466 \end{array}$$

$$\begin{array}{r} 698 \\ - 522 \\ \hline 176 \end{array}$$

$$\begin{array}{r} 541 \\ - 155 \\ \hline 386 \end{array}$$



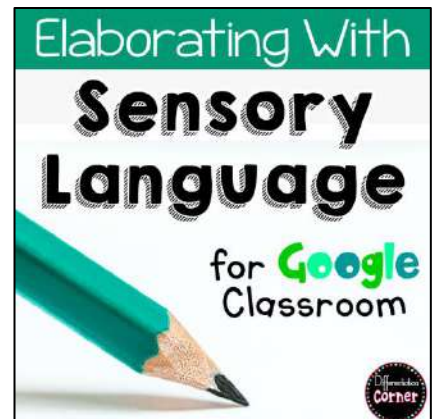
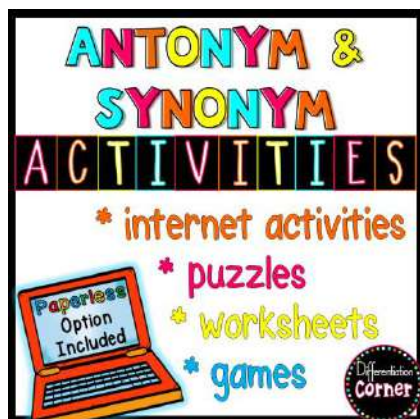
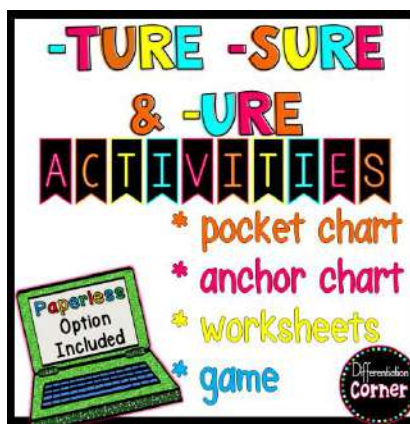
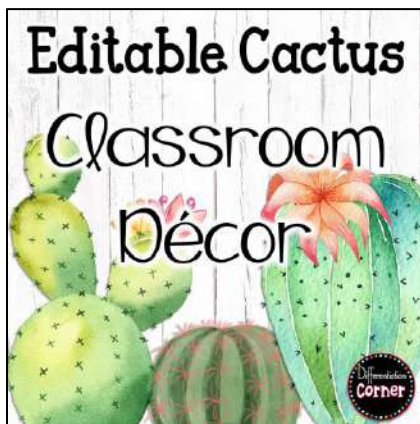
Thank you for purchasing this product! I hope you find it very useful in your classroom.

Follow my store to get notifications of sales and new products! All new products are 50% off for the first 48 hours!

Thanks again!  
Mandie



## ~Other Products you might enjoy ~





# ~Graphics and Fonts by~

